




Name _____

Date _____

Multiplication Method



Use the addition method to solve the illustration.



$$3 \times 2 = 6$$

$$2 + 2 + 2 = 6$$

